

**EXAMINER'S PAGE**

**MATERIALS:**

None

**SCRIPT:**

*Direct student to the pictures on student page.*

**SAY —**

This picture shows an ecosystem.

Which picture is not part of this ecosystem?

**ALTERNATE SCRIPT:**

Circle...

Sign...

Look at/Eye gaze...

Point to...

**AT Type:** \_\_\_\_\_

**Item 39**

**STUDENT RESPONSE**

**Response Item 39:**

A \_\_\_ coral

B \_\_\_ bee


C \_\_\_ fish

D \_\_\_ other

E \_\_\_ no response

Item 39


<b>Prompt Level</b>	Full	Partial	Independent		
<b>Response Type</b>	Wrt/Mrk	Point	Eye Gz	Sign	Verbal



coral



bee



fish

**EXAMINER'S PAGE**

**MATERIALS:**

None

**SCRIPT:**

*Direct student to pictures on student page.*

**SAY—**

Look at the picture of a magnet. (*Point to magnet.*) Now look at these objects. (*Point to objects.*)

Which object will be pulled to the magnet?

**ALTERNATE SCRIPT:**

Circle...

Sign...

Look at/Eye gaze...

Point to...

**AT Type:** \_\_\_\_\_

**Item 17**

**STUDENT RESPONSE**

**Response Item 17:**

A \_\_\_ paper clip

B \_\_\_ basket ball

C \_\_\_ other

D \_\_\_ no response

Item 17

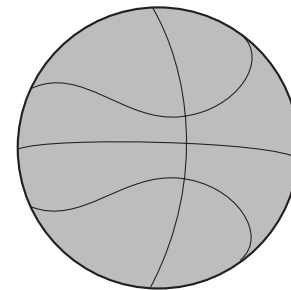
<b>Prompt Level</b>	Full	Partial	Independent		
<b>Response Type</b>	Wrt/Mrk	Point	Eye Gz	Sign	Verbal



magnet



paper clip



basketball

**EXAMINER'S PAGE**

**MATERIALS:**

None

**SCRIPT:**

*Direct student to pictures on student page.*

**SAY—**

Look at these pictures.

Which picture shows the solar system?

**ALTERNATE SCRIPT:**

Circle...

Sign...

Look at/Eye gaze...

Point to...

**AT Type:** \_\_\_\_\_

**Item 36**

**STUDENT RESPONSE**

**Response Item 36:**

A \_\_\_ solar system


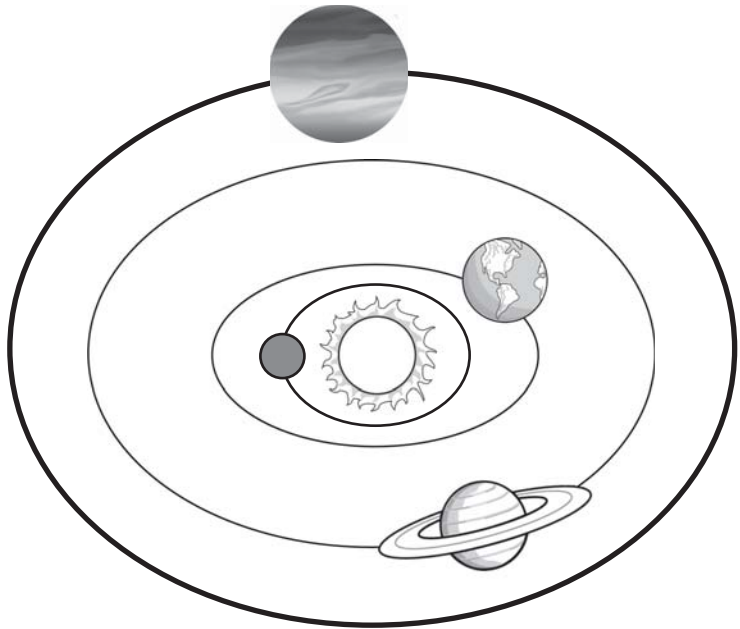
B \_\_\_ sun

C \_\_\_ other

D \_\_\_ no response

Item 36

<b>Prompt Level</b>	Full	Partial	Independent		
<b>Response Type</b>	Wrt/Mrk	Point	Eye Gz	Sign	Verbal



**EXAMINER'S PAGE**

**MATERIALS:**

None

**SCRIPT:**

*Direct student to pictures on student page.*

**SAY—**

This is a plate full of ice cubes.

What will happen to the ice cubes if they are left sitting on a table at 75 degrees Fahrenheit for one hour?

**ALTERNATE SCRIPT:**

Circle...

Sign...

Look at/Eye gaze...

Point to...

**AT Type:** \_\_\_\_\_

**Item 12**

**STUDENT RESPONSE**

**Response Item 12:**

A \_\_\_ freeze

B \_\_\_ evaporate

C \_\_\_ melt

D \_\_\_ other

E \_\_\_ no response

Item 12

<b>Prompt Level</b>	Full	Partial	Independent		
<b>Response Type</b>	Wrt/Mrk	Point	Eye Gz	Sign	Verbal






plate of ice



freeze



evaporate



melt

**EXAMINER'S PAGE**

**MATERIALS:**

None

**SCRIPT:**

*Direct student to pictures on student page.*

**SAY—**

Metals conduct heat better than non-metals. Look at these objects.  
Which object would feel hottest when left in the sun?

**ALTERNATE SCRIPT:**

Circle...

Sign...

Look at/Eye gaze...

Point to...

**AT Type:** \_\_\_\_\_

**Item 24**

**STUDENT RESPONSE**

**Response Item 24 :**

A \_\_\_ frying pan

B\_\_\_ beach ball

C \_\_\_ potted plant


D \_\_\_ book

E \_\_\_ other

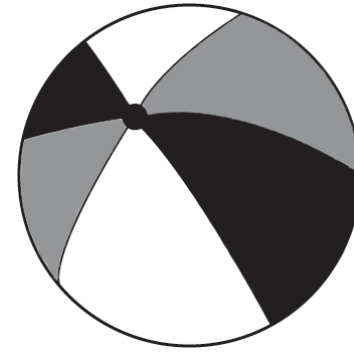
F \_\_\_ no response

Item 24

<b>Prompt Level</b>	Full	Partial	Independent		
<b>Response Type</b>	Wrt/Mrk	Point	Eye Gz	Sign	Verbal



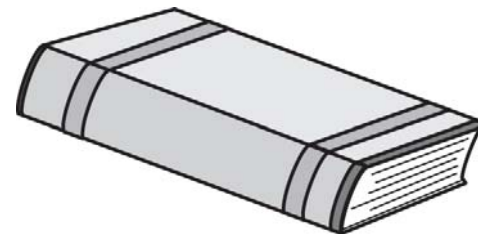
frying pan



beach ball



potted plant



book